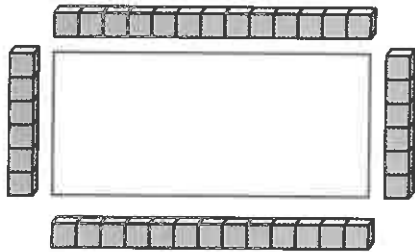


Perimeter of a rectangle **I**

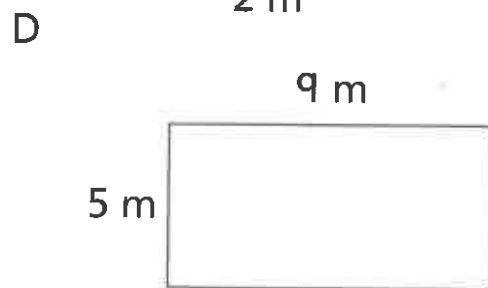
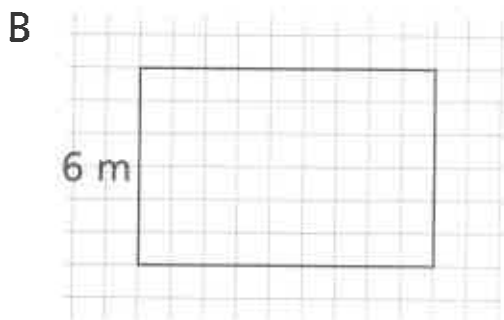
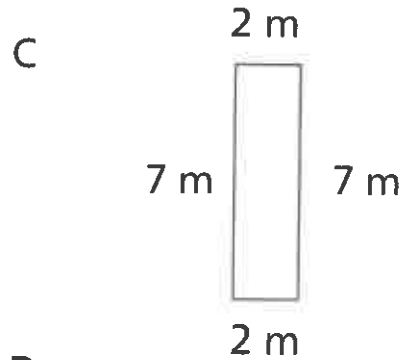
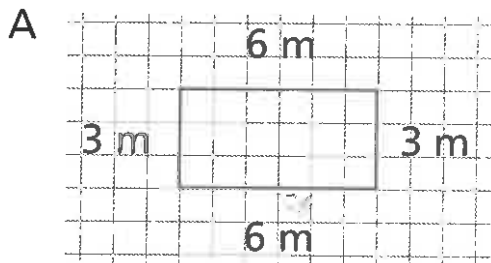
- 1** Liam draws a rectangle. He uses cubes to measure the length of each side. Each cube is 1 cm long.



What is the perimeter of the rectangle?

$$\square + \square + \square + \square = \square \text{ cm}$$

- 2** Find the perimeters of these rectangles.



Rectangle	Perimeter
A	<input type="text"/> m
B	<input type="text"/> m
C	<input type="text"/> m
D	<input type="text"/> m